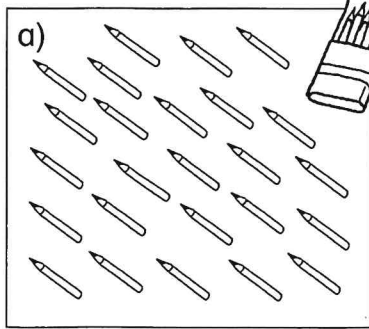


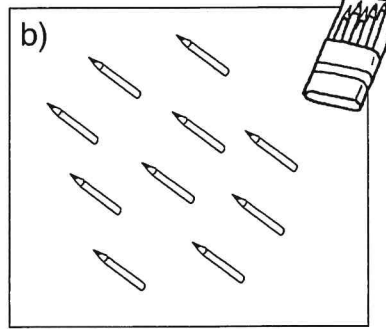


Divisionsaufgaben

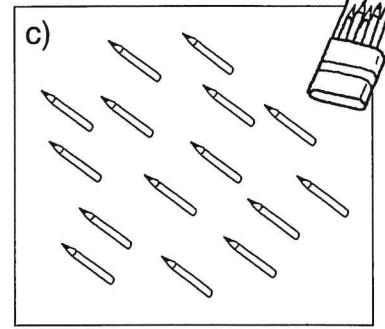
1 Die Stifte werden in Fünferpacks verpackt. Kreise immer passend ein.



$25 : 5 =$ _____

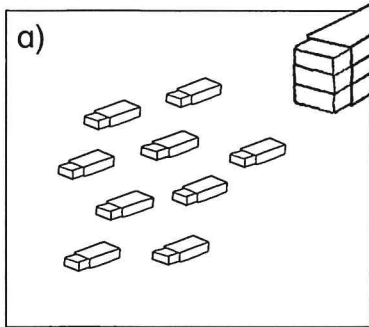


$: 5 =$ _____

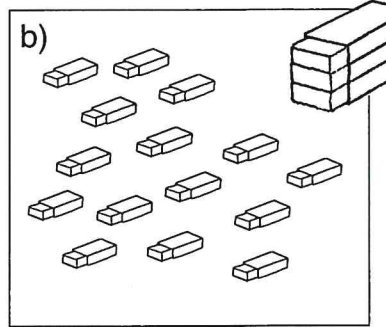


$: 5 =$ _____

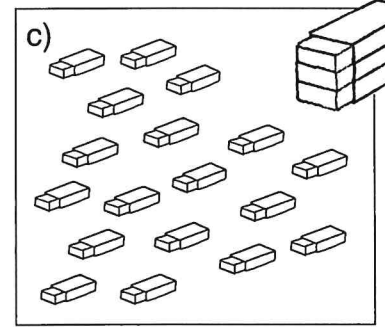
2 Die Radiergummis werden in Dreierpacks verpackt. Kreise immer ein.



$: 3 =$ _____




$: 3 =$ _____

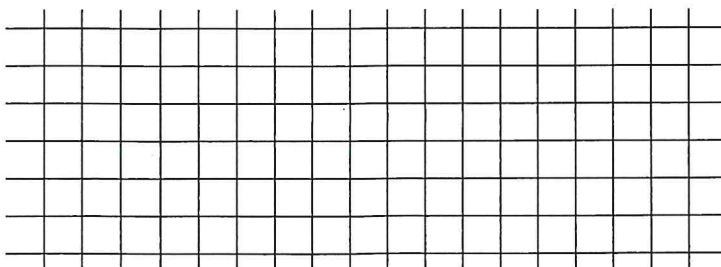



$: 3 =$ _____

3 Zeichne Muster wie Zahlix und Zahlne. Wie viele Muster kannst du zeichnen?



$24 : 4 =$ _____



$24 : 6 =$ _____

