



Umkehraufgaben

1



$$\square + \square = \square$$



$$\square - \square = \square$$

2 Lege und rechne!



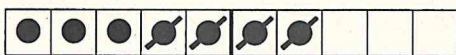
$$4 + 5 = \square$$



$$\square - 5 = 4$$



$$\square + \square = \square$$



$$\square - \square = \square$$

3 Lege, male und rechne!




$$3 + 6 = \square$$



$$9 - 6 = \square$$



$$2 + 4 = \square$$



$$6 - 4 = \square$$

4 $5 + 2 = \square$ $7 + 2 = \square$ $3 + 3 = \square$ $8 + 2 = \square$
 $\square - 2 = 5$ $\square - 2 = 7$ $\square - 3 = 3$ $\square - 2 = 8$

5 $8 - 4 = \square$ $7 - 5 = \square$ $5 - 2 = \square$ $4 - 2 = \square$
 $\square + 4 = 8$ $\square + \square = \square$ $\square + \square = \square$ $\square + \square = \square$