
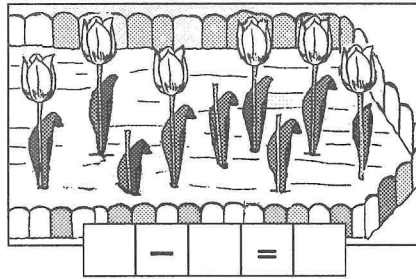



# A Immer weniger

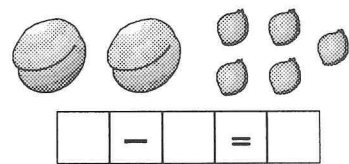


1. Bilde die Minusaufgaben!

$6 - 2 = 4$



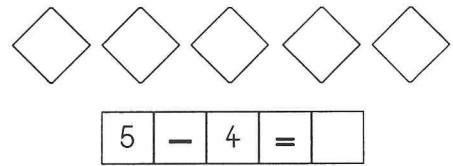
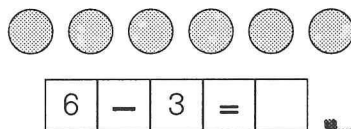
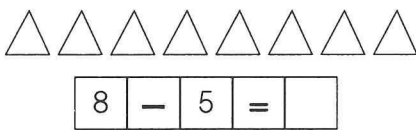
2. Bilde die Minusaufgaben!

$6 - 2 = 4$




3. Streiche durch!

$6 - 2 = 4$



4. Rechne!

$6 - 3 = 3$



$6 - 5 = \square$	$10 - 5 = \square$	$5 - 4 = \square$	$8 - 6 = \square$
$6 - 4 = \square$	$10 - 6 = \square$	$6 - 3 = \square$	$7 - 5 = \square$
$6 - 3 = \square$	$10 - 7 = \square$	$7 - 2 = \square$	$6 - 4 = \square$
$6 - \_ = \square$	$10 - \_ = \square$	$\_ - \_ = \square$	$\_ - \_ = \square$
$6 - \_ = \square$	$10 - \_ = \square$	$\_ - \_ = \square$	$\_ - \_ = \square$

5. Richtig oder falsch?

$7 - 4 = 3$    $6 - 5 = 0$   f

$6 - 3 = 2$ <input type="checkbox"/>	$4 - 2 = 2$ <input type="checkbox"/>	$7 - 2 = 1$ <input type="checkbox"/>	$7 - 3 = 5$ <input type="checkbox"/>
$5 - 0 = 5$ <input type="checkbox"/>	$5 - 1 = 4$ <input type="checkbox"/>	$8 - 3 = 6$ <input type="checkbox"/>	$8 - 7 = 1$ <input type="checkbox"/>